

5 Math Word Problems Worksheets

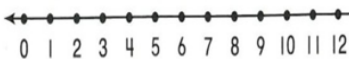
(addition and subtraction problems)

Jim baked 4 apple pies. He baked 7 peach pies. How many pies did he bake?

Draw a picture

Write

Use a number line



There were 8 slices of pizza. Sarah ate 6 pieces. How many are left?



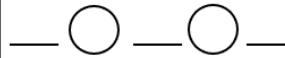
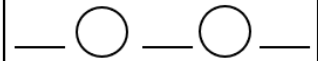
June was selling lemonade. She sold 7 glasses on Monday and 6 glasses on Tuesday. How many glasses of lemonade did she sell?



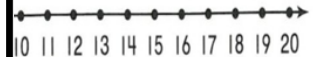
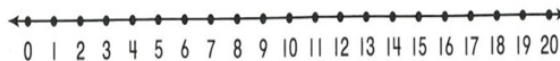
Draw a picture

Write an equation

Write an equation



Use a number line




Common Core Aligned
1.OA.1.

Space to work and show three different strategies

Name: _____

Jake has 6 cookies. His friend
Kate has 5 cookies. How many
cookies do Jake and Kate have
together?

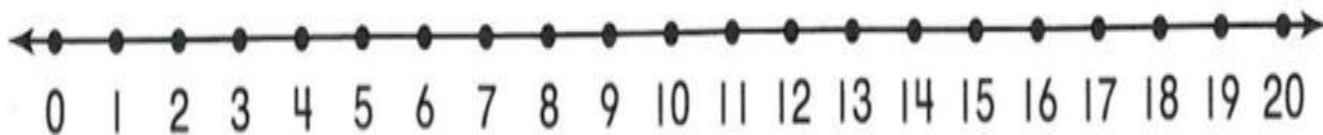


Draw a picture

Write an equation


____ ○ ____ ○ ____

Use a number line



Name: _____

Jim baked 4 apple pies. He baked 7 peach pies. How many pies did he bake?

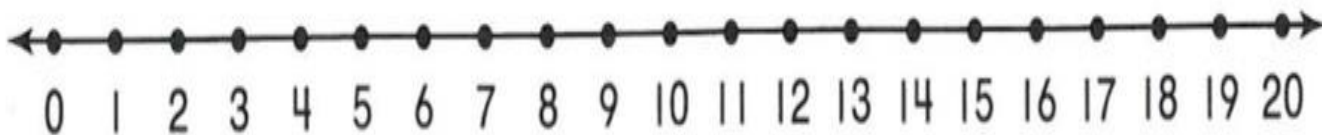


Draw a picture

Write an equation


___ ○ ___ ○ ___

Use a number line



Name: _____

There were 8 slices of pizza.
Sarah ate 6 pieces. How many
pieces of pizza are left?

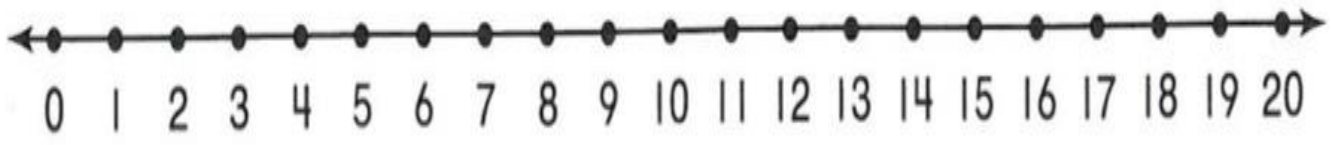


Draw a picture

Write an equation


— ○ — ○ —

Use a number line



Name: _____

There were 11 ladybugs in the grass. 8 ladybugs flew away. How many ladybugs are left in the grass?

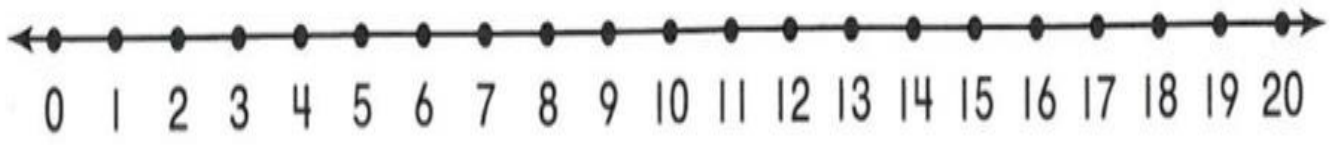


Draw a picture

Write an equation


____ ○ ____ ○ ____

Use a number line



Name: _____

June was selling lemonade. She sold 7 glasses on Monday and 6 glasses on Tuesday. How many glasses of lemonade did she sell?



Draw a picture

Write an equation

___ ○ ___ ○ ___

Use a number line

